

**FAR WESTERN UNIVERSITY
FACULTY OF MANAGEMENT
OFFICE OF THE DEAN
MAHENDRANAGAR, KANCHANPUR
NEPAL**



**MANAGEMENT ADMISSION TEST (2022)
FOR
BACHELOR OF BUSINESS ADMINISTRATION (BBA)**

INSTRUCTIONS

- **MANAGEMENT ADMISSION TEST – 2022(MAT-2022) carries full marks of 100 and it must be completed within 90 minutes.**
- **Use the Answer Sheet for answering the the questions.**
- **Do not forget to write your Roll Number on the Answer Sheet**
- **Indicate your answer on the Answer Sheet by darkening the correct answer choice. Do not write anything else on the Answer Sheet.**
- **Answer will be invalid in case of use of pencil and any cross (×) in one answer and selection of another answer.**
- **There is no negative marking for wrong answer.**
- **Read directions given for questions carefully before answering the questions.**

Section - I: Verbal Ability

Direction: Select the pair which has the same relationship from the following questions which consist of two words having a certain relationship to each other followed by four pairs of related words:

1. Light: Blind
a. speech: dumb b. language: deaf c. tongue: sound d. voice: vibration
2. After: Before
a. first: second b. present: past c. contemporary: historic d. successor: predecessor
3. Gravity: Pull
a. Water: Rain b. Mountain: Height c. River: Depth d. Magnetism: Attraction
4. Zoologist: Animals
a. Botanist: Plants b. Soldier: War c. Doctor: Treatment d. Scientist: Oncology
5. Puppy: Dog
a. Kitten: Mew b. Calf: Cow c. Lion: Roar d. Grass: Green

Direction: From the following sentences followed by four words, you are required to choose one word that can be substituted for the given sentence.

6. Person who travels on foot.
a. pedestrian b. traveler c. walker d. health conscious
7. The points to be discussed at a meeting
a. Schedule b. Agenda c. Strategy d. Plan
8. Medical study of skin and skin disorders
a. Genealogy b. Dermatology c. Oncology d. Histology
9. Something which is used as a sample
a. specimen b. portion c. spectrum d. data
10. Something that has no beginning or end and exists forever.
a. Limitless b. Indefinite c. Eternal d. Infinity

Direction: Select the correct preposition to fill in the blank.

11. He won the scholarship when he was the London School of Business.
a. at b. on c. in d. into
12. Maria met Alex the fourth of March in the last year.
a. on b. at c. of d. in
13. The temperature at the hill station was five degrees zero.
a. under b. below c. by d. to
14. A steady mind triumphs ----- difficulties.
a. in b. over c. with d. at
15. I was disappointed ----- not finding the doctor in his seat.
a. from b. on c. at d. in

Section - II: Quantitative Ability

Direction: In each of the following question, select the best answer choice.

- Which of the following number is an irrational number?
a. 0 b. -3 c. π d. $\sqrt{16}$
- The value of $\sqrt{(31-6)(16+9)}$ is equal to
a. 5 b. 10 c. 25 d. 30
- What is the least number that must be added to 1056 so that the sum is completely divisible by 23?
a. 2 b. 3 c. 18 d. 21
- The value of $\lim_{n \rightarrow \infty} \left(1 + \frac{1}{n}\right)^n$ is denoted by
a. π b. e c. λ d. μ
- $A - (B \cup C)$ is
a. $(A - B) \cup (A - C)$ b. $A - B - C$
c. $(A - B) \cap (A - C)$ d. $A - (B \cap C)$
- Which of the following is not a measure of central tendency?
a. Percentile b. Quartile c. Standard deviation d. Mode
- The standard deviation of a set of 90 observations is 105. If the value of each observation is decreased by 9, then the new standard deviation of these observations would be.....
a. 96 b. 100 c. 114 d. 105
- The coefficient of variation is a percentage expression for
a. Standard deviation b. Quartile deviation
c. Mean deviation d. None of the above
- The answer of factorization of the expression $4z(3a + 2b - 4c) + (3a + 2b - 4c)$ is
a. $(4z + 1)(3a + 2b - 4c)$ b. $(4z + 1) + (3a + 2b - 4c)$
c. $(4z + 1) - (3a + 2b - 4c)$ d. $(4z - 1)(3a - 2b - 4c)$
- Which of these values of x satisfies the inequality $-7x + 6 \leq -8$
a. -2 b. 0 c. -7 d. 2
- Half percent written as decimal is.....
a. 0.5 b. 0.05 c. 0.005 d. 0.55
- Mr. A's salary is 50% more than Mr. B's. How much percent is Mr. B's salary less than Mr. A's?
a. 33.25% b. 33.33% c. 33.5% d. 33%
- If the price of a sugar is raised by 25%, then by how much per cent should a person reduce his consumption of sugar, so that his expenditure remains same?
a. 25% b. 50% c. 20% d. 12.5%
- Sam borrowed some money from his friend at simple interest of 6% per annum. He returned his friend Rs. 15600. After how much time did Sam return the money if he had borrowed Rs. 12000?
a. 8 years b. 2.5 years c. 5 years d. 3.5 years
- A sells a car to B at 10% loss. If B sells it for Rs. 54,000 and gains 20%, the cost price of the car for A was:
a. Rs. 25,000 b. Rs. 50,000 c. Rs. 37,500 d. Rs. 60,000
- In a college, the ratio of the number of boys to girls is 8: 5. If there are 200 girls, the total number of students in the college is
a. 420 b. 520 c. 620 d. 720

32. What is the solution set of the equation: $x^2 + 4x + 3 = 0$
 a. $\{1, 3\}$ b. $\{-1, 3\}$ c. $\{1, -3\}$ d. $\{-1, -3\}$
33. If r is the radius of the sphere, then the surface area of the sphere is
 a. $4\pi r^2$ b. $2\pi r^2$ c. πr^2 d. $4/3\pi r^2$
34. $\triangle ABC$ is right angled at A. If $AB = 24$ mm and $AC = 7$ mm, $BC = ?$
 a. 31 mm b. 25 mm c. 30 mm d. 28 mm
35. A polygon having seven sides is called:
 a. decagon b. heptagon c. quadrilateral d. hexagon
36. Area of a triangle with base b and height h is represented by
 a. $1/2 \times bh$ b. $2 + bh$ c. $2 \times bh$ d. $2/bh$
37. A shopkeeper purchases 15 mangoes for Rs. 10 and sells them at 10 mangoes for Rs. 15. Thus, he earns a profit of
 a. 50% b. 75% c. 80% d. 125%
38. The sum of two numbers is 24 and the sum of their squares is 386, then one number is
 a. 17 b. 19 c. 9 d. 11
39. In the series: 1, 3, 7, 15, 31, 63,, which number comes next?
 a. 120 b. 126 c. 127 d. 94
40. Which of the following are methods under measures of dispersion?
 a. Standard deviation b. Mean deviation c. Range d. All of the above

Section - III: General Awareness

Direction: In each of the following question, select the best answer choice.

41. How many provinces of Nepal touch both India and China boarder?
 a. 1 b. 2 c. 3 d. 4
42. Which of the following is not the American vaccine against corona virus?
 a. Pfizer b. Moderna c. Johnson and Jonson d. covishield
43. Who is the author of novel *Shirish Ko Phool*?
 a. Neelam Karki Niharika b. Bishnu Kumari Waiba
 c. Ghanashyam Kandel d. Chandra Prakash Baniya
44. Who is the current governor of Nepal Rashtra Bank?
 a. Cholendra shumser JB Rana b. Khil Raj Regmi
 c. Maha Prasad Adhikari d. Sapana Pradhan Malla
45. What is the capital city of Ukraine?
 a. Nassau b. Yerevan c. Tirana d. Kyiv
46. According to Hindu mythology, what was the real name of *Bhishma Pitamah*?
 a. Shiridhoj b. Kashinath c. Siddharth d. Devdutta
47. Where is the headquarter of International Organization for Standardization (ISO)?
 a. Geneva b. New York c. Paris d. London
48. How many permanent members are there in the UN Security Council?
 a. Three b. Five c. Six d. Four

49. is a software program used to view web pages?
a. site b. host c. link d. browser
50. The smallest unit in a digital system is a.....
a. Bit b. Byte c. Character d. Kilobyte
51. Who is the author of Harry Porter?
a. LK Brown b. JK Felmming c. JK Smith d. JK Rolling
52. Wall Street (New York) is famous for:
a. Stock Exchange b. Dollar Exchange c. Money Exchange d. Retail Exchange
53. According to census of 2078, Nepal's population is
a. 2,91,92,480 b. 3,13,63,840 c. 2,92,91,480 d. 3,63,13921
54. On the basis area, smallest district of sudurpaschim is.....
a. Bajura b. Doti c. Baitadi d. Darchula
55. Where is the headquarters of the SAARC?
a. Manila b. Kathmandu c. New Delhi d. Dhaka

Section - III: Logical Reasoning

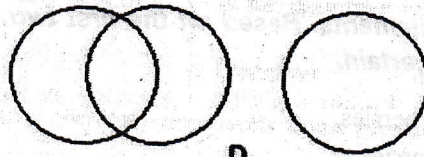
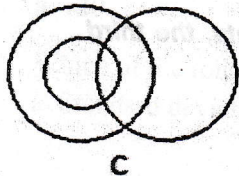
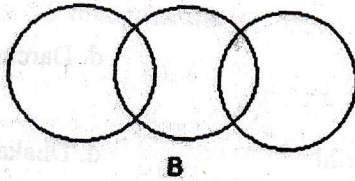
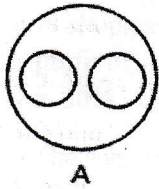
Direction: Each problem consists of three statements. Based on the first two statements, the third statement may be true, false, or uncertain.

56. Statement I. Blueberries cost more than strawberries.
Statement II. Blueberries cost less than raspberries.
Statement III. Raspberries cost more than strawberries and blueberries.
If the first two statements are true, the third statement is
a. true b. false c. uncertain
57. Statement I. Mara runs faster than Gail.
Statement II. Lily runs faster than Mara.
Statement III. Gail runs faster than Lily.
If the first two statements are true, the third statement is
a. true b. false c. uncertain
58. Statement I. Joe is younger than Kathy.
Statement II. Mark was born after Joe.
Statement III. Kathy is older than Mark.
If the first two statements are true, the third statement is
a. true b. false c. uncertain
59. Statement I The temperature on Monday was lower than on Tuesday.
Statement II. The temperature on Wednesday was lower than on Tuesday.
Statement III. The temperature on Monday was higher than on Wednesday
If the first two statements are true, the third statement is
a. True b. False c. Uncertain
60. Statement I. Martina is sitting in the desk behind Jerome.
Statement II. Jerome is sitting in the desk behind Bryant.
Statement III. Bryant is sitting in the desk behind Martina.
If the first two statements are true, the third statement is
a. Trues b. False c. Uncertain

Direction: Find the odd one

61. a. Book b. Index c. Glossary d. Chapter
 62. a. Cornea b. Retina c. Pupil d. Vision
 63. a. Noun b. Preposition c. Punctuation d. Adverb
 64. a. Inch b. Ounce c. Centimeter d. Yard
 65. a. Leopard b. Cougar c. Elephant d. Lion
 66. A is the father of B. B is the only son of C. C is the daughter of D. C is the mother of E. E is the sister of F.
 How is C related to B?
 a. Father b. Mother c. Daughter d. Son

67. Which of the following diagrams correctly represents lions, elephants, and animals?



- a. A b. B c. C d. D
68. Arrange the words given below in a meaningful sequence.
 1. packing 2. Purchased 3. Arrival of customer 4. Bargaining 5. Display of goods
 a. 5, 3, 4, 1, 2 b. 3, 5, 4, 2, 1 c. 3, 5, 1, 4, 2 d. 5, 3, 1, 2, 4
69. Vijay travelled 12 km Southward, then turned right and travelled 10 km, then turned right and travelled 12 km.
 How far was Vijay from the starting point?
 a. 22 km b. 44 km c. 12 km d. 10 km
70. Select the word from the given alternative which cannot be formed using the letters of the word "ADMINISTRATION"
 a. RATION b. MINISTER c. MIND d. STATION

Direction: In the given series, fill the suitable letter pattern in the blank.

71. ELFA, GLHA, ILJA,, MLNA
 a. OLPA b. KLMA c. LLMA d. KLLA
72. CMM, EOO, GQQ,, KUU
 a. GRR b. GSS c. ISS d. ITT
73. QPO, NML, KJI,, EDC
 a. HGF b. CAB c. JKL d. GHI
74. BCB, DED, FGF, HIH,
 a. JKI b. HJH c. IJI d. JHJ
75. QAR, RAS, SAT, TAU,
 a. UAV b. UAT c. TAS d. TAT

Section - V: Business and Economics

Direction: For each of the questions below, select the best of the answer.

76. What is the full form of WTO?
a. World Travel Organization b. Wimbledon Tennis Office
c. World Trade Organization d. Women Travel Organization
77. Which of the following known as father of economics?
a. Marshal b. Keynes c. Adam smith d. J. S. Mill
78. What do you mean by mixed economy?
a. Modern and traditional industry b. Foreign and domestic investments
c. Public and private sectors d. Commercial and subsistence farming
79. Who is the official "lender of the last resort" in Nepal?
a. Nepal Investment Bank b. Nepal Rastra Bank
c. Rastriya Banijya bank d. Nepal Bank Limited
80. Everest Bank Limited is the joint venture bank of :
a. Punjab National Bank, India b. Habib Bank Limited, Pakistan
c. Reserve Bank of India d. State Bank of India
81. "You come first" is related with :
a. Shree airlines b. Yeti airlines c. Buddha airlines d. Saurya airlines
82. Excise duty is a tax levied on the
a. import of goods b. Export of goods c. Production of goods d. Sale of goods
83. Which is the first commercial bank of Nepal?
a. Rastriya Banijya Bank b. Nepal Bank Limited
c. Nepal Rastra Bank d. Standard Chartered Bank
84. The headquarter of IBRD is in
a. Paris, France b. New York, America c. Washington DC, America d. Montreal, Canada
85. Myanmar's national currency is:
a. Myanmar Kyat b. Myanmar Ringgit c. Myanmar Dirham d. Myanmar Dinar
86. Which foreign currency has highest value in Nepal?
a. U.S. Dollar b. European Euro c. UK Pound Sterling d. Swiss Franc
87. A persistent fall in the general price level of goods and services is known as –
a. Deflation b. Disinflation c. Stagflation d. Inflation
88. GAAP means:
a. Generally accepted auditing practices b. Government accepted auditing practices
c. Generally accepted accounting principles d. Government accepted accounting principles
89. GDP is –
a. nation's total economic activity
b. value of all finished goods produced in one year by its nationals
c. value of goods and services produced in an area, industry or sector of an economy
d. capital that has been consumed over the year in the form of housing, vehicle or machinery deterioration

90. Which of the following financial statements is generally prepared first?
 - a. Income statement
 - b. Balance sheet
 - c. Statement of retained earnings
 - d. Statement of cash flows
91. The account that records expenses, gains and losses is called
 - a. Nominal account
 - b. Personal account
 - c. Real account
 - d. None of the above
92. The ratio that refers to a firm's ability to meet its short-term obligations out of its short-term resources is called:
 - a. Profitability ratio
 - b. Activity ratio
 - c. Leverage ratio
 - d. Liquidity ratio
93. Wages paid on the installation of machinery Rs. 500, had been debited to wages account. It is an error of
 - a. omission
 - b. commission
 - c. principle
 - d. compensating
94. Sales – gross profit=?
 - a. Net profit
 - b. Net sales
 - c. Cost of goods sold
 - d. Total cost
95. To whom dividend is given at a fixed rate in a share of company?
 - a. To equity shareholders
 - b. To preference shareholders
 - c. To debenture holders
 - d. To promoters
96. Which of the following is not an element of the marketing mix?
 - a. Product
 - b. Price
 - c. Place
 - d. Profits
97. If beginning finished goods Rs. 45, 000; cost of goods manufactured Rs. 25,000 and ending finished goods Rs. 50,000 then what is the value of cost of goods sold.
 - a. Rs. 20,000
 - b. Rs. 45,000
 - c. Rs. 70,000
 - d. Rs. 120,000
98. Control function of management cannot be performed without:
 - a. planning
 - b. organizing
 - c. staffing
 - d. motivation
99. Which is not one of the Fayol's principles?
 - a. Unity of command.
 - b. Unity of direction.
 - c. Division of work
 - d. Time and motion study
100. Removing barriers or restrictions set by the government is known as
 - a. Globalization
 - b. Privatization
 - c. Nationalism
 - d. Liberalization

Roll Number:

Roll Number In word:



MANAGEMENT ADMISSION TEST-2022 FOR BBA PROGRAM ANSWER SHEET

(DIRECTION: Please record your answers in this sheet by darkening the answer choice)

- | | | | |
|---------------------|---------------------|---------------------|----------------------|
| 1. (a) (b) (c) (d) | 26. (a) (b) (c) (d) | 51. (a) (b) (c) (d) | 76. (a) (b) (c) (d) |
| 2. (a) (b) (c) (d) | 27. (a) (b) (c) (d) | 52. (a) (b) (c) (d) | 77. (a) (b) (c) (d) |
| 3. (a) (b) (c) (d) | 28. (a) (b) (c) (d) | 53. (a) (b) (c) (d) | 78. (a) (b) (c) (d) |
| 4. (a) (b) (c) (d) | 29. (a) (b) (c) (d) | 54. (a) (b) (c) (d) | 79. (a) (b) (c) (d) |
| 5. (a) (b) (c) (d) | 30. (a) (b) (c) (d) | 55. (a) (b) (c) (d) | 80. (a) (b) (c) (d) |
| 6. (a) (b) (c) (d) | 31. (a) (b) (c) (d) | 56. (a) (b) (c) (d) | 81. (a) (b) (c) (d) |
| 7. (a) (b) (c) (d) | 32. (a) (b) (c) (d) | 57. (a) (b) (c) (d) | 82. (a) (b) (c) (d) |
| 8. (a) (b) (c) (d) | 33. (a) (b) (c) (d) | 58. (a) (b) (c) (d) | 83. (a) (b) (c) (d) |
| 9. (a) (b) (c) (d) | 34. (a) (b) (c) (d) | 59. (a) (b) (c) (d) | 84. (a) (b) (c) (d) |
| 10. (a) (b) (c) (d) | 35. (a) (b) (c) (d) | 60. (a) (b) (c) (d) | 85. (a) (b) (c) (d) |
| 11. (a) (b) (c) (d) | 36. (a) (b) (c) (d) | 61. (a) (b) (c) (d) | 86. (a) (b) (c) (d) |
| 12. (a) (b) (c) (d) | 37. (a) (b) (c) (d) | 62. (a) (b) (c) (d) | 87. (a) (b) (c) (d) |
| 13. (a) (b) (c) (d) | 38. (a) (b) (c) (d) | 63. (a) (b) (c) (d) | 88. (a) (b) (c) (d) |
| 14. (a) (b) (c) (d) | 39. (a) (b) (c) (d) | 64. (a) (b) (c) (d) | 89. (a) (b) (c) (d) |
| 15. (a) (b) (c) (d) | 40. (a) (b) (c) (d) | 65. (a) (b) (c) (d) | 90. (a) (b) (c) (d) |
| 16. (a) (b) (c) (d) | 41. (a) (b) (c) (d) | 66. (a) (b) (c) (d) | 91. (a) (b) (c) (d) |
| 17. (a) (b) (c) (d) | 42. (a) (b) (c) (d) | 67. (a) (b) (c) (d) | 92. (a) (b) (c) (d) |
| 18. (a) (b) (c) (d) | 43. (a) (b) (c) (d) | 68. (a) (b) (c) (d) | 93. (a) (b) (c) (d) |
| 19. (a) (b) (c) (d) | 44. (a) (b) (c) (d) | 69. (a) (b) (c) (d) | 94. (a) (b) (c) (d) |
| 20. (a) (b) (c) (d) | 45. (a) (b) (c) (d) | 70. (a) (b) (c) (d) | 95. (a) (b) (c) (d) |
| 21. (a) (b) (c) (d) | 46. (a) (b) (c) (d) | 71. (a) (b) (c) (d) | 96. (a) (b) (c) (d) |
| 22. (a) (b) (c) (d) | 47. (a) (b) (c) (d) | 72. (a) (b) (c) (d) | 97. (a) (b) (c) (d) |
| 23. (a) (b) (c) (d) | 48. (a) (b) (c) (d) | 73. (a) (b) (c) (d) | 98. (a) (b) (c) (d) |
| 24. (a) (b) (c) (d) | 49. (a) (b) (c) (d) | 74. (a) (b) (c) (d) | 99. (a) (b) (c) (d) |
| 25. (a) (b) (c) (d) | 50. (a) (b) (c) (d) | 75. (a) (b) (c) (d) | 100. (a) (b) (c) (d) |

**FAR WESTERN UNIVERSITY
FACULTY OF MANAGEMENT
OFFICE OF THE DEAN
MAHENDRANAGAR, KANCHANPUR
NEPAL**



**MANAGEMENT ADMISSION TEST (2022)
FOR
BACHELOR OF BUSINESS ADMINISTRATION (BBA)**

INSTRUCTIONS

- **MANAGEMENT ADMISSION TEST – 2022(MAT-2022) carries full marks of 100 and it must be completed within 90 minutes.**
- **Use the Answer Sheet for answering the the questions.**
- **Do not forget to write your Roll Number on the Answer Sheet**
- **Indicate your answer on the Answer Sheet by darkening the correct answer choice. Do not write anything else on the Answer Sheet.**
- **Answer will be invalid in case of use of pencil and any cross (×) in one answer and selection of another answer.**
- **There is no negative marking for wrong answer.**
- **Read directions given for questions carefully before answering the questions.**

Section - I: Verbal Ability

Direction: Select the pair which has the same relationship from the following questions which consist of two words having a certain relationship to each other followed by four pairs of related words:

1. Light: Blind
a. speech: dumb b. language: deaf c. tongue: sound d. voice: vibration
2. After: Before
a. first: second b. present: past c. contemporary: historic d. successor: predecessor
3. Gravity: Pull
a. Water: Rain b. Mountain: Height c. River: Depth d. Magnetism: Attraction
4. Zoologist: Animals
a. Botanist: Plants b. Soldier: War c. Doctor: Treatment d. Scientist: Oncology
5. Puppy: Dog
a. Kitten: Mew b. Calf: Cow c. Lion: Roar d. Grass: Green

Direction: From the following sentences followed by four words, you are required to choose one word that can be substituted for the given sentence.

6. Person who travels on foot.
a. pedestrian b. traveler c. walker d. health conscious
7. The points to be discussed at a meeting
a. Schedule b. Agenda c. Strategy d. Plan
8. Medical study of skin and skin disorders
a. Genealogy b. Dermatology c. Oncology d. Histology
9. Something which is used as a sample
a. specimen b. portion c. spectrum d. data
10. Something that has no beginning or end and exists forever.
a. Limitless b. Indefinite c. Eternal d. Infinity

Direction: Select the correct preposition to fill in the blank.

11. He won the scholarship when he was the London School of Business.
a. at b. on c. in d. into
12. Maria met Alex the fourth of March in the last year.
a. on b. at c. of d. in
13. The temperature at the hill station was five degrees zero.
a. under b. below c. by d. to
14. A steady mind triumphs ----- difficulties.
a. in b. over c. with d. at
15. I was disappointed ----- not finding the doctor in his seat.
a. from b. on c. at d. in

Section - II: Quantitative Ability

Direction: In each of the following question, select the best answer choice.

- Which of the following number is an irrational number?
a. 0 b. -3 c. π d. $\sqrt{16}$
- The value of $\sqrt{(31-6)(16+9)}$ is equal to
a. 5 b. 10 c. 25 d. 30
- What is the least number that must be added to 1056 so that the sum is completely divisible by 23?
a. 2 b. 3 c. 18 d. 21
- The value of $\lim_{n \rightarrow \infty} \left(1 + \frac{1}{n}\right)^n$ is denoted by
a. π b. e c. λ d. μ
- $A - (B \cup C)$ is
a. $(A - B) \cup (A - C)$ b. $A - B - C$
c. $(A - B) \cap (A - C)$ d. $A - (B \cap C)$
- Which of the following is not a measure of central tendency?
a. Percentile b. Quartile c. Standard deviation d. Mode
- The standard deviation of a set of 90 observations is 105. If the value of each observation is decreased by 9, then the new standard deviation of these observations would be.....
a. 96 b. 100 c. 114 d. 105
- The coefficient of variation is a percentage expression for
a. Standard deviation b. Quartile deviation
c. Mean deviation d. None of the above
- The answer of factorization of the expression $4z(3a + 2b - 4c) + (3a + 2b - 4c)$ is
a. $(4z + 1)(3a + 2b - 4c)$ b. $(4z + 1) + (3a + 2b - 4c)$
c. $(4z + 1) - (3a + 2b - 4c)$ d. $(4z - 1)(3a - 2b - 4c)$
- Which of these values of x satisfies the inequality $-7x + 6 \leq -8$
a. -2 b. 0 c. -7 d. 2
- Half percent written as decimal is.....
a. 0.5 b. 0.05 c. 0.005 d. 0.55
- Mr. A's salary is 50% more than Mr. B's. How much percent is Mr. B's salary less than Mr. A's?
a. 33.25% b. 33.33% c. 33.5% d. 33%
- If the price of a sugar is raised by 25%, then by how much per cent should a person reduce his consumption of sugar, so that his expenditure remains same?
a. 25% b. 50% c. 20% d. 12.5%
- Sam borrowed some money from his friend at simple interest of 6% per annum. He returned his friend Rs. 15600. After how much time did Sam return the money if he had borrowed Rs. 12000?
a. 8 years b. 2.5 years c. 5 years d. 3.5 years
- A sells a car to B at 10% loss. If B sells it for Rs. 54,000 and gains 20%, the cost price of the car for A was:
a. Rs. 25,000 b. Rs. 50,000 c. Rs. 37,500 d. Rs. 60,000
- In a college, the ratio of the number of boys to girls is 8: 5. If there are 200 girls, the total number of students in the college is
a. 420 b. 520 c. 620 d. 720

32. What is the solution set of the equation: $x^2 + 4x + 3 = 0$
 a. $\{1, 3\}$ b. $\{-1, 3\}$ c. $\{1, -3\}$ d. $\{-1, -3\}$
33. If r is the radius of the sphere, then the surface area of the sphere is
 a. $4\pi r^2$ b. $2\pi r^2$ c. πr^2 d. $4/3\pi r^2$
34. ΔABC is right angled at A. If $AB = 24$ mm and $AC = 7$ mm, $BC = ?$
 a. 31 mm b. 25 mm c. 30 mm d. 28 mm
35. A polygon having seven sides is called:
 a. decagon b. heptagon c. quadrilateral d. hexagon
36. Area of a triangle with base b and height h is represented by
 a. $1/2 \times bh$ b. $2 + bh$ c. $2 \times bh$ d. $2/bh$
37. A shopkeeper purchases 15 mangoes for Rs. 10 and sells them at 10 mangoes for Rs. 15. Thus, he earns a profit of
 a. 50% b. 75% c. 80% d. 125%
38. The sum of two numbers is 24 and the sum of their squares is 386, then one number is
 a. 17 b. 19 c. 9 d. 11
39. In the series: 1, 3, 7, 15, 31, 63,, which number comes next?
 a. 120 b. 126 c. 127 d. 94
40. Which of the following are methods under measures of dispersion?
 a. Standard deviation b. Mean deviation c. Range d. All of the above

Section - III: General Awareness

Direction: In each of the following question, select the best answer choice.

41. How many provinces of Nepal touch both India and China boarder?
 a. 1 b. 2 c. 3 d. 4
42. Which of the following is not the American vaccine against corona virus?
 a. Pfizer b. Moderna c. Johnson and Jonson d. covishield
43. Who is the author of novel *Shirish Ko Phool*?
 a. Neelam Karki Niharika b. Bishnu Kumari Waiba
 c. Ghanashyam Kandel d. Chandra Prakash Baniya
44. Who is the current governor of Nepal Rashtra Bank?
 a. Cholendra shumser JB Rana b. Khil Raj Regmi
 c. Maha Prasad Adhikari d. Sapana Pradhan Malla
45. What is the capital city of Ukraine?
 a. Nassau b. Yerevan c. Tirana d. Kyiv
46. According to Hindu mythology, what was the real name of *Bhishma Pitamah*?
 a. Shiridhoj b. Kashinath c. Siddharth d. Devdutta
47. Where is the headquarter of International Organization for Standardization (ISO)?
 a. Geneva b. New York c. Paris d. London
48. How many permanent members are there in the UN Security Council?
 a. Three b. Five c. Six d. Four

49. is a software program used to view web pages?
a. site b. host c. link d. browser
50. The smallest unit in a digital system is a.....
a. Bit b. Byte c. Character d. Kilobyte
51. Who is the author of Harry Porter?
a. LK Brown b. JK Felmming c. JK Smith d. JK Rolling
52. Wall Street (New York) is famous for:
a. Stock Exchange b. Dollar Exchange c. Money Exchange d. Retail Exchange
53. According to census of 2078, Nepal's population is
a. 2,91,92,480 b. 3,13,63,840 c. 2,92,91,480 d. 3,63,13921
54. On the basis area, smallest district of sudurpaschim is.....
a. Bajura b. Doti c. Baitadi d. Darchula
55. Where is the headquarters of the SAARC?
a. Manila b. Kathmandu c. New Delhi d. Dhaka

Section - III: Logical Reasoning

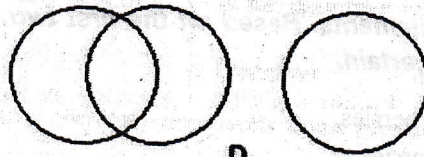
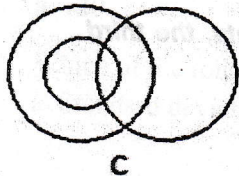
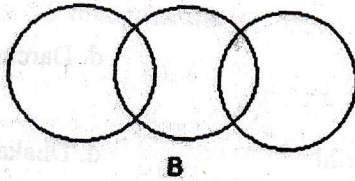
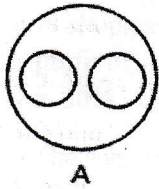
Direction: Each problem consists of three statements. Based on the first two statements, the third statement may be true, false, or uncertain.

56. Statement I. Blueberries cost more than strawberries.
Statement II. Blueberries cost less than raspberries.
Statement III. Raspberries cost more than strawberries and blueberries.
If the first two statements are true, the third statement is
a. true b. false c. uncertain
57. Statement I. Mara runs faster than Gail.
Statement II. Lily runs faster than Mara.
Statement III. Gail runs faster than Lily.
If the first two statements are true, the third statement is
a. true b. false c. uncertain
58. Statement I. Joe is younger than Kathy.
Statement II. Mark was born after Joe.
Statement III. Kathy is older than Mark.
If the first two statements are true, the third statement is
a. true b. false c. uncertain
59. Statement I The temperature on Monday was lower than on Tuesday.
Statement II. The temperature on Wednesday was lower than on Tuesday.
Statement III. The temperature on Monday was higher than on Wednesday
If the first two statements are true, the third statement is
a. True b. False c. Uncertain
60. Statement I. Martina is sitting in the desk behind Jerome.
Statement II. Jerome is sitting in the desk behind Bryant.
Statement III. Bryant is sitting in the desk behind Martina.
If the first two statements are true, the third statement is
a. Trues b. False c. Uncertain

Direction: Find the odd one

61. a. Book b. Index c. Glossary d. Chapter
 62. a. Cornea b. Retina c. Pupil d. Vision
 63. a. Noun b. Preposition c. Punctuation d. Adverb
 64. a. Inch b. Ounce c. Centimeter d. Yard
 65. a. Leopard b. Cougar c. Elephant d. Lion
 66. A is the father of B. B is the only son of C. C is the daughter of D. C is the mother of E. E is the sister of F.
 How is C related to B?
 a. Father b. Mother c. Daughter d. Son

67. Which of the following diagrams correctly represents lions, elephants, and animals?



- a. A b. B c. C d. D
68. Arrange the words given below in a meaningful sequence.
 1. packing 2. Purchased 3. Arrival of customer 4. Bargaining 5. Display of goods
 a. 5, 3, 4, 1, 2 b. 3, 5, 4, 2, 1 c. 3, 5, 1, 4, 2 d. 5, 3, 1, 2, 4
69. Vijay travelled 12 km Southward, then turned right and travelled 10 km, then turned right and travelled 12 km.
 How far was Vijay from the starting point?
 a. 22 km b. 44 km c. 12 km d. 10 km
70. Select the word from the given alternative which cannot be formed using the letters of the word "ADMINISTRATION"
 a. RATION b. MINISTER c. MIND d. STATION

Direction: In the given series, fill the suitable letter pattern in the blank.

71. ELFA, GLHA, ILJA,, MLNA
 a. OLPA b. KLMA c. LLMA d. KLLA
72. CMM, EOO, GQQ,, KUU
 a. GRR b. GSS c. ISS d. ITT
73. QPO, NML, KJI,, EDC
 a. HGF b. CAB c. JKL d. GHI
74. BCB, DED, FGF, HIH,
 a. JKI b. HJH c. IJI d. JHJ
75. QAR, RAS, SAT, TAU,
 a. UAV b. UAT c. TAS d. TAT

Section - V: Business and Economics

Direction: For each of the questions below, select the best of the answer.

76. What is the full form of WTO?
a. World Travel Organization b. Wimbledon Tennis Office
c. World Trade Organization d. Women Travel Organization
77. Which of the following known as father of economics?
a. Marshal b. Keynes c. Adam smith d. J. S. Mill
78. What do you mean by mixed economy?
a. Modern and traditional industry b. Foreign and domestic investments
c. Public and private sectors d. Commercial and subsistence farming
79. Who is the official "lender of the last resort" in Nepal?
a. Nepal Investment Bank b. Nepal Rastra Bank
c. Rastriya Banijya bank d. Nepal Bank Limited
80. Everest Bank Limited is the joint venture bank of :
a. Punjab National Bank, India b. Habib Bank Limited, Pakistan
c. Reserve Bank of India d. State Bank of India
81. "You come first" is related with :
a. Shree airlines b. Yeti airlines c. Buddha airlines d. Saurya airlines
82. Excise duty is a tax levied on the
a. import of goods b. Export of goods c. Production of goods d. Sale of goods
83. Which is the first commercial bank of Nepal?
a. Rastriya Banijya Bank b. Nepal Bank Limited
c. Nepal Rastra Bank d. Standard Chartered Bank
84. The headquarter of IBRD is in
a. Paris, France b. New York, America c. Washington DC, America d. Montreal, Canada
85. Myanmar's national currency is:
a. Myanmar Kyat b. Myanmar Ringgit c. Myanmar Dirham d. Myanmar Dinar
86. Which foreign currency has highest value in Nepal?
a. U.S. Dollar b. European Euro c. UK Pound Sterling d. Swiss Franc
87. A persistent fall in the general price level of goods and services is known as –
a. Deflation b. Disinflation c. Stagflation d. Inflation
88. GAAP means:
a. Generally accepted auditing practices b. Government accepted auditing practices
c. Generally accepted accounting principles d. Government accepted accounting principles
89. GDP is –
a. nation's total economic activity
b. value of all finished goods produced in one year by its nationals
c. value of goods and services produced in an area, industry or sector of an economy
d. capital that has been consumed over the year in the form of housing, vehicle or machinery deterioration

90. Which of the following financial statements is generally prepared first?
 - a. Income statement
 - b. Balance sheet
 - c. Statement of retained earnings
 - d. Statement of cash flows
91. The account that records expenses, gains and losses is called
 - a. Nominal account
 - b. Personal account
 - c. Real account
 - d. None of the above
92. The ratio that refers to a firm's ability to meet its short-term obligations out of its short-term resources is called:
 - a. Profitability ratio
 - b. Activity ratio
 - c. Leverage ratio
 - d. Liquidity ratio
93. Wages paid on the installation of machinery Rs. 500, had been debited to wages account. It is an error of
 - a. omission
 - b. commission
 - c. principle
 - d. compensating
94. Sales – gross profit=?
 - a. Net profit
 - b. Net sales
 - c. Cost of goods sold
 - d. Total cost
95. To whom dividend is given at a fixed rate in a share of company?
 - a. To equity shareholders
 - b. To preference shareholders
 - c. To debenture holders
 - d. To promoters
96. Which of the following is not an element of the marketing mix?
 - a. Product
 - b. Price
 - c. Place
 - d. Profits
97. If beginning finished goods Rs. 45, 000; cost of goods manufactured Rs. 25,000 and ending finished goods Rs. 50,000 then what is the value of cost of goods sold.
 - a. Rs. 20,000
 - b. Rs. 45,000
 - c. Rs. 70,000
 - d. Rs. 120,000
98. Control function of management cannot be performed without:
 - a. planning
 - b. organizing
 - c. staffing
 - d. motivation
99. Which is not one of the Fayol's principles?
 - a. Unity of command.
 - b. Unity of direction.
 - c. Division of work
 - d. Time and motion study
100. Removing barriers or restrictions set by the government is known as
 - a. Globalization
 - b. Privatization
 - c. Nationalism
 - d. Liberalization

Roll Number:

Roll Number In word:



MANAGEMENT ADMISSION TEST-2022 FOR BBA PROGRAM ANSWER SHEET

(DIRECTION: Please record your answers in this sheet by darkening the answer choice)

- | | | | |
|---------------------|---------------------|---------------------|----------------------|
| 1. (a) (b) (c) (d) | 26. (a) (b) (c) (d) | 51. (a) (b) (c) (d) | 76. (a) (b) (c) (d) |
| 2. (a) (b) (c) (d) | 27. (a) (b) (c) (d) | 52. (a) (b) (c) (d) | 77. (a) (b) (c) (d) |
| 3. (a) (b) (c) (d) | 28. (a) (b) (c) (d) | 53. (a) (b) (c) (d) | 78. (a) (b) (c) (d) |
| 4. (a) (b) (c) (d) | 29. (a) (b) (c) (d) | 54. (a) (b) (c) (d) | 79. (a) (b) (c) (d) |
| 5. (a) (b) (c) (d) | 30. (a) (b) (c) (d) | 55. (a) (b) (c) (d) | 80. (a) (b) (c) (d) |
| 6. (a) (b) (c) (d) | 31. (a) (b) (c) (d) | 56. (a) (b) (c) (d) | 81. (a) (b) (c) (d) |
| 7. (a) (b) (c) (d) | 32. (a) (b) (c) (d) | 57. (a) (b) (c) (d) | 82. (a) (b) (c) (d) |
| 8. (a) (b) (c) (d) | 33. (a) (b) (c) (d) | 58. (a) (b) (c) (d) | 83. (a) (b) (c) (d) |
| 9. (a) (b) (c) (d) | 34. (a) (b) (c) (d) | 59. (a) (b) (c) (d) | 84. (a) (b) (c) (d) |
| 10. (a) (b) (c) (d) | 35. (a) (b) (c) (d) | 60. (a) (b) (c) (d) | 85. (a) (b) (c) (d) |
| 11. (a) (b) (c) (d) | 36. (a) (b) (c) (d) | 61. (a) (b) (c) (d) | 86. (a) (b) (c) (d) |
| 12. (a) (b) (c) (d) | 37. (a) (b) (c) (d) | 62. (a) (b) (c) (d) | 87. (a) (b) (c) (d) |
| 13. (a) (b) (c) (d) | 38. (a) (b) (c) (d) | 63. (a) (b) (c) (d) | 88. (a) (b) (c) (d) |
| 14. (a) (b) (c) (d) | 39. (a) (b) (c) (d) | 64. (a) (b) (c) (d) | 89. (a) (b) (c) (d) |
| 15. (a) (b) (c) (d) | 40. (a) (b) (c) (d) | 65. (a) (b) (c) (d) | 90. (a) (b) (c) (d) |
| 16. (a) (b) (c) (d) | 41. (a) (b) (c) (d) | 66. (a) (b) (c) (d) | 91. (a) (b) (c) (d) |
| 17. (a) (b) (c) (d) | 42. (a) (b) (c) (d) | 67. (a) (b) (c) (d) | 92. (a) (b) (c) (d) |
| 18. (a) (b) (c) (d) | 43. (a) (b) (c) (d) | 68. (a) (b) (c) (d) | 93. (a) (b) (c) (d) |
| 19. (a) (b) (c) (d) | 44. (a) (b) (c) (d) | 69. (a) (b) (c) (d) | 94. (a) (b) (c) (d) |
| 20. (a) (b) (c) (d) | 45. (a) (b) (c) (d) | 70. (a) (b) (c) (d) | 95. (a) (b) (c) (d) |
| 21. (a) (b) (c) (d) | 46. (a) (b) (c) (d) | 71. (a) (b) (c) (d) | 96. (a) (b) (c) (d) |
| 22. (a) (b) (c) (d) | 47. (a) (b) (c) (d) | 72. (a) (b) (c) (d) | 97. (a) (b) (c) (d) |
| 23. (a) (b) (c) (d) | 48. (a) (b) (c) (d) | 73. (a) (b) (c) (d) | 98. (a) (b) (c) (d) |
| 24. (a) (b) (c) (d) | 49. (a) (b) (c) (d) | 74. (a) (b) (c) (d) | 99. (a) (b) (c) (d) |
| 25. (a) (b) (c) (d) | 50. (a) (b) (c) (d) | 75. (a) (b) (c) (d) | 100. (a) (b) (c) (d) |

FAR WESTERN UNIVERSITY
FACULTY OF MANAGEMENT
OFFICE OF THE DEAN
MAHENDRANAGAR, KANCHANPUR
NEPAL



**MANAGEMENT ADMISSION TEST (MAT)
FOR
BACHELOR OF BUSINESS ADMINISTRATION (BBA)
(Mangsir 19 , 2080)**

INSTRUCTIONS

- *This **Management Admission Test** carries full marks of 100 and it must be completed within 90 minutes.*
- *Use the **Answer Sheet** for answering the the questions.*
- *Do not forget to write your **Roll Number** on the AnswerSheet*
- *Indicate your answer on the Answer Sheet by darkening the correctanswer choice. Do not write anything else on the Answer Sheet.*
- *Answer will be invalid in case of use of pencil and any cross (×) in one answer and selection of anotheranswer.*
- *There is no negative marking for wronganswer.*
- *Read directions given for questions carefullybefore answering thequestions.*

Section - I: Verbal Ability

Direction: Select the correct preposition to fill in the blank.

1. In the morning, I simply take a glance the newspaper headlines.

- a. at b. on c. of d. through

2. He looks upset, I think he took the criticism.....heart.

- a. to b. about c. in d. of

3. I will meet you _____ 4:00 PM.

- a. by b. in c. on d. at

4. As.....me, I will be happy to lend a hand.

- a. in b. for c. about d. of

5. He looks upset, I think he took the criticism.....heart.

- a. to b. about c. in d. of

Direction: Select the word with correct spelling.

6. a. Deference b. Defferance c. Defference d. Defference

7. a. Juwelery b. Jewelry c. Juallery d. Jewellery

8. a. Benifical b. Benefecial c. Benifecial d. Beneficial

9. a. Enterprenuer b. Entreprenuer c. Entrepreneur d. Enterpruner

10. a. Millenniume b. Millenium c. Milenium d. Millennium

Direction: From the following sentences followed by four words, you are required to choose one word that can be substituted for the given sentence.

11. Goods carried in a ship.

- a. sack b. luggage c. cargo d. package

12. A fully grown person.

- a. Old b. Adult c. Matured d. Physically developed

13. A record of one's own life written by oneself

- a. History b. Biography c. Bibliography d. autobiography

14. Killing of one's own mother.

- a. Homicide b. Patricide c. Matricide d. Infanticide

15. Medical study of heart and its diseases.

- a. cardiology b. Endocrinology c. Genealogy d. Orthopedics

Section - II: Quantitative Ability

Direction: In each of the following question, select the best answer choice.

16. Which of the following should be added to make $x^4 + 64$ a perfect square?

- a. $4x^2$ b. $16x^2$ c. $8x^2$ d. $-8x^2$

17. $4x^2 + 16x + 36$ is equivalent to?

- a. $4(x^2+4x+4)$ b. $4(x+4)(x+4)$ c. $4x(x+4+9)$ d. $4(x^2+4x+9)$

18. $(3x-9) / (x-3) =$

- a. $x-3$ b. x c. 3 d. $3x$

19. If $2^x = 16$, the value of x is

- a. 4 b. 6 c. 8 d. 10

20. The expression $a^3 - 3ab(a-b) - b^3$ is formula of

- a. $a^3 - b^3$ b. $a^3 + b^3$ c. $(a+b)^3$ d. $(a-b)^3$

21. Which of the following is not a prime number?

- a. 51 b. 61 c. 71 d. 41

22. A man got a prize of Rs.550. If he paid 10% tax to the government then how much he got after tax?

- a. Rs.650 b. Rs.400 c. Rs.395 d. Rs.455

23. If 5% of a number is 10. Then which of the following is that number?

- a. 200 b. 105 c. 110 d. 115

24. If sale price of an article is three times more than the cost price, then what is the profit in percent?

- a. 300% b. 200% c. 220% d. 30%

25. If a sum of money double after 10 years then what will be the simple rate of interest per annum?

- a. 2% b) 5% c) 20% d) 10%

26. Which term of the sequence 3, 5, 7, 9 is 23?

- a. 11 b. 12 c. 13 d. 14

27. Simplify: $5\sqrt{2} \div \sqrt{1}x$

- a. $5\sqrt{2}x$ b. $5x\sqrt{2}$ c. $2\sqrt{5}x$ d. $2x\sqrt{5}$

28. Binod's bank balance is Rs 5,000 more than three times of his friend's bank balance. If his friend's bank balance is "2y" what is Sohan's bank balance?

- a. 6y b. $2y + 5,000$ c. $6y + 5,000$ d. 20,000

29.. If the coordinates of a point are (0, -10), then it lies in:

- a. X-axis b. Y-axis c. At origin d. Between x-axis and y-axis

30. Two angles are called supplementary angles, If their sum is.....

- a. 90° b. 360° c. 180° d. 60°

31. A pentagon has Sides.

- a. 5 b. 6 c. 7 d. 8

32. An angle of 180° is called.....angle.

- a. obtuse b. straight c. right d. Acute

33. The ratio of number of men and women in factory of 840 workers is 5:7. How many more men should be joined to make the ratio 1:1.

- a. 240 b. 200 c. 170 d. 140

34. The set of positive integers is

- a. Infinite b. Finite c. Subset d. Empty

35. A person sold a product for Rs. 423 and incurred a loss of 6%. At what price would it be sold so as to earn a profit of 8%?

- a. Rs. 525 b. Rs. 500 c. Rs. 490 d. Rs. 486

36. Which of the following numbers gives 240 when added to its own square?

- a. 15 b. 16 c. 18 d. 20

37. Which of the following is best measure of dispersion?

- a. Quartile deviation b. mean deviation c. range d. standard deviation

38. If $A:B=2:5$, $B:C=3:4$ and $C:D=4:3$ then find the ratio of A and D?

- a) 2:3 b) 5:3 c) 4:5 d) 2:5

39. The sum of two numbers is 27 and product is 182. The numbers are:

- a. 12 and 13 b. 13 and 14 c. 12 and 15 d. 13 and 24

40. The area of a rectangle whose length and breadth are $3y$ and $9y^2$ respectively is:

- a. $12y^3$ b. $21y^3$ c. $27y^3$ d. y^3

Section - III: General Awareness

Direction: In each of the following question, select the best answer choice.

41. How many districts of Sudur Paschim Province touch both India and China boarder?

- a. 1 b. 2 c. 3 d. 4

42. Who is known as '*kabishiromani*' in Nepali Literature?

- a. Lekhnath poudel b. Shambhu Prasad Dhungel
c. Madhav prasad Ghimire d. Laxmi prasad Devkota

43. Who is the founder of face book?

- a. *Mark Zuckerberg* b. Edward Zuckerberg c. Elon Musk d. Larry Ellison

44. Who is the author of *Karnali Blues*?

- a. Jhamak Ghimire b. Buddhi Sagarc. Tara Devi Tuladhard. Chakrapani Chalise

45. What is apple's operating system called?

- a. windows b. android c. Unix d. MacOS

46. Who is known as Father of computer?

- a. John McCarthy b. Charles Babbage c. Joshep Maire d. Konard Zuce

47. Who is the current captain of Nepalese cricket team?

- a. Paras Khadka b. Gyanendra Malla
c. Sandeep Lamichhane d. Rohit Kumar Poudel

48. According to Mahabharat who was Karn's mother?

- a. Saraswati b. Kunti c. Satyavati d. Ganga

49. What is the full form of CPU?

- a. Computer Processing Unit b. Computer Principle Unit
c. Central Processing Unit d. Control Processing Unit

50. In which district is "sworgadwari" Temple located?

- a. Rasuwa b. Pyuthan c. Gorkha d. Mustang

51. Which mountain of Nepal is considered as the basis for authentic time?

- a. Everest b. Dhaulagiri c. Gourishankar d. Makalu

52. Which nation does not fall under SAARC ?

- a. China b. Afghanistan c. India. Bhutan

53. The printed output from a computer is called.....

- a. copy b. soft copy c. hard copy d. paper

54. When was the United Nations Organization founded?

- a. August 9, 1945 b. October 24, 1944
c. October 24, 1945 d. December 10, 1945

55. In MS Word shortcut for cut is:

- a. CTRL+C b. CTRL+X c. CTRL+V d. None of these

Section - III: Logical Reasoning

Direction: In the given series, fill the suitable letter pattern in the blank.

56. SCD, TEF, UGH,, WKL

a. CMN

b. UJI

c. VIJ

d. IJT

57. QPO, NML, KJI,.....EDC

a. HGF

b. CAB

c. JKM

d. GHD

58. CMM, EOO, GQQ,, KUU

a. GRR

b. GSS

c. ISS

d. ITT

59. QAR, RAS, SAT, TAU,

a. UAV

b. UAT

c. TAS

d. TAT

60. JAK, KBL, LCM, MDN,

a. OEP

b. NEO

c. MEN

d. PFQ

Direction: Find the odd one

61. a. Cornea b. Retina c. Pupil d. Vision
62. a. Spoon b. Sword c. Knife d. Fork
63. a. Fish b. Snake c. Crocodile d. Whale
64. a. Cat b. Dog c. Fox d. Rabbit
65. a. Book b. Index c. Glossary d. Chapter
66. In a row of trees, a tree is 7th from left and 14th from right end. How many trees in the row?
a. 21 b. 15 c. 20 d. 24
67. Pointing to a photograph Lata says, "He is the son of the only son of my grandfather." How is the man in the photograph related to Lata?
a. Brother b. Uncle c. Cousin d. Data is inadequate
68. In a cage there are Rabbits and Pigeons. They have 20 heads and 48 feet. How many Rabbits are there?
a. 3 b. 4 c. 5 d. 6
69. Your father says I have four sons. But you say I have only three brothers. Who is wrong?
a. Father b. Son c. Both d. None
70. A family consists of six members P, Q, R, X, Y and Z. P and R are married couple. Q is the son of R but R is not the mother of Q. Y is the brother of R. X is the daughter of P. Z is the brother of P. How many female members are there in the family?
a. One b. Two c. Three d. Four

Direction: Choose the pair in which the words are differently related.

71. a. Aero plane: Pilot b. Rocket : Space c. Car : Road d. Ship : Sea
72. a. Oil : Lamp b. Power : Machine c. Oxygen : Life d. Water : Tap
73. a. Ear : Deaf b. Leg : Lameness c. Eye : Blind d. Tongue : Taste
74. a. Artist : Troupe b. Prime Minister : Cabinet c. Boss : Gang d. Captain : Team
75. a. Star : Galaxy b. Wheel : Axle c. Moon : Earth d. Mercury: Sun

Section - V: Business and Economics

Direction: For each of the questions below, select the best of the answer.

76. The price elasticity of demand for salt is
- a. Perfectly elastic b. Perfectly inelastic .

c. Elasticity greater than unity

d. Elasticity less than unity

77. The market with a single producer is

a. Perfect competition

b. Monopolistic competition

c. Oligopoly

d. Monopoly

78. Macroeconomics is the study of

a. Inflation

b. Unemployment

c. Growth

d All of above

79. Management is needed at

a. Top-level

b. Middle level

c. lower level

d. all levels

80. Which among the following is not an element of co-ordination

a. integration

b. balancing

c. proper timing

d. directing

81. Find the odd one out

a. goals

b. objective

c. polices

d. motivation

82. Fiscal policy is prepared by

a. Ministry of Finance

b. Planning commission

c. Central bank

d. Department of industry

83. calls in arrear is

a. Liability

b. Income

c. Asset

d. Surplus

84. Which of the following is the most sensitive element of marketing mix?

a. Product

b. Price

c. Place

d. packaging

85. Copyrights, patents and trademarks are examples of

a. current assets

b. fixed assets

c. intangible assets

d. investments

86. Total of all direct costs is termed as.....

a. prime cost.

b. works cost.

c. cost of sales.

d. cost of production.

87. The full form of GAAP is:

a. Generally accepted auditing practices

b. Government accepted auditing practices

c. Generally accepted accounting principles

d. Government accepted accounting principles

88. The expenses paid to workers for overtime are considered as:

a.Fixed cost b.Variable cost c. Dependent cost d. Total cost

89. What is the major factor that differentiates a service from a product?

a. Availability b. Intangibilityc. Priced. Experience

90. Which of the following is also called a supermarket?

a. Self-service store b. Retail storec. Hypermarketc. All of these

91. E-marketing is a part of which of the following?

a. E-payment b. E-commercec. E-mail marketingd. Traditional marketing

92. The liability of shareholders in a public company is:

a. Unlimited b. partially limited c. Limited d. All of these

93. In a cashbook, a contra entry is recorded on the

a. debit and credit side of a cashbook b. debit side of a cashbook
c. credit side of a cashbook d. not recorded in the cashbook

94. Nepalese economy is:

a. Capitalist economy b. Socialist economy c. Mixed economy d. Free economy

95. According todiminishing balance method of depreciation, the depreciation:

a. Remains constant b. Increase each year.c. Decrease each year d. None of these.

96. The arithmetical accuracy of books of account is verified through?

a. Journal b. Trial Balance c. Ledger d. None of these

97. Debenture holders are:

a. Owner of the company b. Debtors of the company
c. Creditors of the company d. advisors of the company

98. The first function of management is

a. planning b. organizing c. controlling d. coordination.

99. Which of the following is not an inventory valuation method?

a. FIFO b. LIFO c. Weighted Average d. EOQ

100. Which item comes under investing activities in cash flow?

a. Redemption of preference share b. Issue of preference share
c. Issue of debenture d. sale of land

FAR WESTERN UNIVERSITY
FACULTY OF MANAGEMENT
OFFICE OF THE DEAN
MAHENDRANAGAR, KANCHANPUR
NEPAL



BBA/BHM MANAGEMENT ADMISSION TEST (MAT-2024)
(November 16, 2024)

INSTRUCTIONS

- This Management Admission Test carries full marks of 100 and it must be completed within 90 minutes.
- Use the Answer Sheet for answering the the questions.
- Do not forget to write your Roll Number on the Answer Sheet
- Indicate your answer on the Answer Sheet by darkening the correct answer choice.
- Do not write anything else on the Answer Sheet.
- Answer will be invalid in case of use of pencil and any cross (x) in one answer and selection of another answer.
- Read directions given for questions carefully before answering the questions.

Question Bank

Section - I: Business and Economics

Direction: For each of the questions below, select the best of the answer.

1. Which of the following networks connect people within a company to each other and to the company network.
a. Bitstreams b. Extranets c. Internets d. Intranets
2. The most prevalent online payment method is ...
a. PayPal b. Checks c. Credit Cards d. Debit
3. The field of finance is closely related to the fields of:
a. statistics and economics b. statistics and risk analysis
c. economics and accounting d. accounting and comparative return analysis
4. Which of the following properly lists balance sheet items in order of liquidity, from most liquid to least liquid?
a. Accounts receivable, inventory, marketable securities, cash.
b. Cash, marketable securities, accounts receivable, inventory.
c. Inventory, marketable securities, cash, accounts receivable.
d. Cash, inventory, accounts receivable, marketable securities.
5. All of the following are examples of tax-deductible expenses, except:
a. dividends on common shares. b. interest payments
c. amortization charges d. sales and administrative expenses
6. Which of the following is the primary regulatory body for stock market in Nepal?
a. Securities Board b. Insurance Board c. Ministry of Finance d. Nepal Rastra Bank
7. In the context of Nepalese business, what is CSR commonly understood as?
a. Corporate sales return b. Customer service regulations
c. Consumer satisfaction rating d. Corporate social responsibility

8. What is the primary benefit of remittances for the Nepalese economy?
 - a. Household income and spending
 - b. Increases agricultural production
 - c. Reduces inflation
 - d. Encourages foreign direct investment
9. What is meant by "demand" in economics?
 - a. The total supply of a good
 - b. The level of imports and exports
 - c. The number of goods producers are willing to sell
 - d. The number of goods consumers are willing to buy at various prices
10. What is GDP a measure of?
 - a. Total income of a nation's residents
 - b. Net exports minus imports
 - c. Total production and services within a country
 - d. Total national savings
11. The term "monopoly" refers to:
 - a. A market structure with many buyers and sellers
 - b. A market with no barriers to entry
 - c. A market structure with a single seller
 - d. A system of government-owned businesses
12. What is the primary goal of monetary policy?
 - a. To increase taxes
 - b. To create jobs in government sectors
 - c. To control inflation
 - d. To reduce exports
13. What does a "trade deficit" indicate?
 - a. A country exports more than it imports
 - b. A country has balanced imports and exports
 - c. A country has no imports
 - d. A country imports more than it exports
14. The break-even point is where:
 - a. Total costs equal total revenue
 - b. Net profit is maximized
 - c. The company operates at a loss
 - d. Total assets equal total liabilities
15. In which business structure do owners have "limited liability"?
 - a. Sole proprietorship
 - b. Partnership
 - c. Corporation
 - d. Cooperative
16. The term "liquidity" in finance refers to:
 - a. The level of debt in a business
 - b. The ease with which assets can be converted into cash
 - c. The profit generated by a business
 - d. The long-term investments of a business
17. The trade agreement with the objective of liberalizing trade by eliminating or reducing tariffs, subsidies and quotas is:
 - a. Free Trade Area – FTA
 - b. European Community – EC
 - c. General Agreement on Tariffs and Trade – GATT
 - d. The North American Free Trade Agreement – NAFTA
18. In a company, the "board of directors" is responsible for:
 - a. Day-to-day operations
 - b. Direct supervision of employees
 - c. Managing individual projects
 - d. Setting the company's overall policies and strategic direction
19. In accounting, "accrued expenses" are:
 - a. Expenses that have been incurred but not yet paid
 - b. Expenses that have been paid in advance
 - c. Revenue received in advance
 - d. A form of long-term debt
20. Which institution in Nepal is responsible for formulating and implementing monetary policy?
 - a. Ministry of Finance
 - b. Nepal Stock Exchange (NEPSE)
 - c. Nepal Rastra Bank (NRB)
 - d. Trade and Export Promotion Centre (TEPC)
21. The Nepal Stock Exchange (NEPSE) is responsible for:
 - a. Facilitating the trading of stocks and securities
 - b. Regulating banking activities
 - c. Regulating securities markets
 - d. Issuing national currency
22. What is a common issue faced by cooperatives in Nepal?
 - a. Excessive foreign investments
 - b. Overdependence on agricultural loans
 - c. Strong regulatory support
 - d. Cooperative crimes and mismanagement
23. In the case of perfect elasticity, the demand curve is..
 - a. vertical
 - b. horizontal
 - c. flat
 - d. steep
24. Perfect competition is characterized by
 - a. large number of buyers and sellers
 - b. homogeneous product
 - c. free entry and exit of firms
 - d. all the above
25. The distinction between variable cost and fixed cost is relevant only in
 - a. long period
 - b. short period
 - c. medium term period
 - d. mixed period
26. Car and petrol are
 - a. complimentary goods
 - b. substitute goods
 - c. supplementary goods
 - d. reserve goods
27. If NTC charges on telephone bill Rs. 250 per month plus long-distance charge @ Rs 2 per call, this cost is classified as a:
 - a. fixed cost
 - b. variable cost
 - c. semi-variable cost
 - d. mixed cost

- a. variable cost b. fixed cost c. total cost d. semi variable cost
25. Which objective is most suitable for the firms with limited resource where market is dominated by a major competitor?
- a. Niche b. Buy out c. Harvest d. Divest

Section - II: Verbal Ability

Directions: In the following questions, choose the correct word from the given options which best expresses the meaning of the capitalized word.

26. DISTASTEFUL
a. unpleasant b. contaminated c. useless d. tasteless
27. CONFIRM
a. verify b. approve c. Ratify d. Obtain
28. ABSURD
a. logical b. inaccurate c. refrain d. ridiculous
29. MOTIVATION
a. emotion b. inducement c. ambition d. incitement
30. HYBRID
a. pedigreed b. hackneyed c. unusual d. crossbred

Direction: Select the word which is the closest to the opposite in meaning of the word in capital letters

31. ATTRACT
a. distract b. repel c. reject d. reveal
32. TIMID
a. bold b. fearful c. tasteless d. busy
33. CONFIDENT
a. reserved b. sky c. timid d. diffident
34. VIRTUE
a. vice b. goodness c. simplicity d. generosity
35. GENUINE
a. correction b. fake c. chaste d. smile

Direction: Select the proper preposition to fill in the blanks in the following questions:

36. I am terrible..... cooking food.
a. in b. for c. at d. on
37. Go..... these stairs until you reach the basement.
a. straight b. up c. through d. down
38. There is a black markthe T-shirt of my brother.
a. on b. in c. over d. at
39. The man came..... a car.
a. on b. by c. in d. from
40. When I entered the room he was sitting..... the bed.
a. in b. into c. on d. over

Direction: Substitute the following phrases or groups of words by the single word given in the options.

41. Dinner for numerous people that is generally ceremonial in nature.
a. party b. gathering c. banquet d. social reception
42. Something that is no longer in use
a. censured b. obsolete c. history d. avaricious
43. The people in a theatre or a cinema
a. audience b. mass c. crowd d. mob
44. A person who eats too much
a. reveler b. miser c. glutton d. stingy
45. Extra services and facilities that a hotel offers its guests, beyond the basics of a room and bed.
a. laundry service b. amenities c. concierge d. restaurant

Section - III: Quantitative Ability

Direction: In each of the following question, select the best answer choice.

46. The sum of angles in a triangle is equal to:
a. 90 degrees b. 180 degrees c. 270 degrees d. 360 degrees
47. What is the value of 5! (5 factorial)?
a. 120 b. 60 c. 20 d. 720
48. The ratio of the present age of father to that of son is 7:2. After 10 years their ages will be in the ratio of 9:4. The present ages

of the father is:

- a. 35 years b. 40 years c. 30 years d. 25 years

49. If $P(A) = 0.8$, $P(B) = 0.5$ and $P(B|A) = 0.4$, what is the value of $P(A \cap B)$?

- a. 0.32 b. 0.25 c. 0.1 d. 0.5

50. What is the value of square root of 16?

- a. 4 b. -4 c. 4 and -4 d. 256

51. Which of the following is a factor of $x^2 - 5x + 6$?

- a. $x+3$ b. $x+6$ c. $x-5$ d. $x-2$

52. Which of the following is solution of the inequality $11-3x \leq 5$?

- a. -2 b. -1 c. 1 d. 2

53. Which of the following is the next term of the sequence: 2, 9, 28, 65, 126, ...

- a. 217 b. 215 c. 262 d. 252

54. How many three different digit number plates can be formed using the integers 2, 3, 4, 5, and 6?

- a. 3 b. 12 c. 60 d. 125

55. The maximum value of $Z = 3x + 4y$ subjected to constraints $x + y \leq 4$, $x \geq 0$ and $y \geq 0$ is:

- a. 12 b. 14 c. 16 d. None of the above

56. If lower quartile mark is 30 and there are 400 students who appeared in the exam, how many students obtained marks more than or equal to 30?

- a. 370 b. 300 c. 200 d. 100

57. The mean of seven observations is 8. A new observation 16 is added. The mean of eight observations is:

- a. 12 b. 9 c. 8 d. 24

58. The standard deviation of a certain series of scores is found to be 4.56. If a constant score of 4 is added to each of the scores, what will be the standard deviation of the new series of scores?

- a. 18.24 b. 0.56 c. 8.56 d. 4.56

59. If $a < b$ and $c < 0$ then which of the following is true?

- a. $ac > bc$ b. $a/c < b/c$ c. $a-c > b-c$ d. $a+c > b+c$

60. The investments of A, B and C in a business are respectively 15,000, 20,000 and 30,000. If they divide the profit of Rs. 130,000 in the ratio of their investment then profit of B is:

- a. Rs. 30,000 (b) Rs. 50,000 (c) Rs. 40,000 (d) Rs. 60,000

61. 20% of Rams capital is equal to 15% of Shyams capital. If Rams capital is 12 crores the Shyams capital is:

- a. 15 crores b. 18 crores c. 14 crores d. 16 crores

62. If the sum of money is doubled itself in 5 years, then the rate of interest is:

- a. 18% b. 20% c. 15% d. 10%

63. If the cost of 5 kg apple is equal to the cost of 12 kg mango and if cost per kg of apple is Rs. 240 then cost per kg mango is:

- a. Rs. 120 b. Rs. 90 c. Rs. 100 d. Rs. 110

64. A square matrix $A = (a_{ij})$ in which $a_{ij} = 0$ for $i \neq j$ and $a_{ij} = k$ (constant) for $i = j$ is called a:

- a. scalar matrix b. unit matrix c. null matrix d. diagonal matrix

65. If $A = \{1, 3, 4, 6, 7, 8\}$ and $B = \{2, 3, 4, 7, 9\}$ then $A \cap B$ is:

- a. $\{1, 3, 4\}$ b. $\{3, 4, 7\}$ c. $\{3, 6, 7\}$ d. $\{5, 6, 7\}$

Section - IV: General Awareness

Direction: In each of the following question, select the best answer choice.

66. The national currency for the Kingdom of Bhutan is

- a. Ngultrum b. Ringgit c. Rufiyaa d. Rupee

67. The Brand "Hyatt" is associated with....

- a. computer b. car c. airlines d. hotel

68. Who wrote the national anthem of Nepal?

- a. Pradip Kumar Rai b. Shambhu Baskota c. Madhav Prashad Ghimire d. Abhi Subedi

69. Calling code of Nepal

- a. 888 b. 977 c. 001 d. 991

70. CNN stands for

- a. Canada News Network b. Cable News Network c. Crime News Network d. China News Network

71. The author of the book Muna Madan is

- a. Ramlal Joshi b. Laxmi Prasad Devkota c. Madhav Prasad Ghimire d. Lekhnath Poudel

72. Who is the founder of facebook?

- a. Mark Zuckerberg b. Steve Jobs c. Ronald Wayne d. Bill Gates

73. Which of the following country is not the member of the SAARC?

- a. Myanmar b. Bhutan c. Nepal d. Maldives

74. The brand name BMW is associated with.....

- a) car b) watch c) computer d) television

75. Who is the current captain of Nepal women's national volleyball team?
 a. Saraswoti chaudhary b. Niruta thagunna c. Usha Bhandari d. Aruna shahi
76. According to Mahabharat who was Karn's mother?
 a. Saraswati b. Kuntic. c. Aniani d. Ganga
77. Identify the device through which data and instructions are entered into a computer
 a. software b. output device c. input device d. memory
78. Blue tooth technology allows
 a. Satellite communication b. Wireless communication between equipments
 c. Signal transmission on mobile phones only d. Landline phone to mobile phone communication
79. Eight Bits make up a
 a. byte b. megabyte c. kilobyte d. none
80. What is the number of permanent member states in the UN Security Council?
 a. 10 b. 5 c. 15 d. 20

Section - V: Logical Reasoning

Direction: In the given series, fill the suitable letter pattern in the blank.

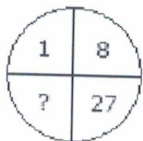
81. FAG, GAF, HAI, IAH, _____
 JAK b. HAL c. HAK d. JAI
82. SCD, TEF, UGH, _____, WKL
 a. CMN b. UJI c. VIJ d. IJT
83. CAT, ECV, GEX, ?
 a. IGZ b. JLN c. FMU d. KFY
84. BXD, EUG, HRJ, ?
 a. LOM b. KOM c. IOM d. NOM
85. QPO, NML, KJI,EDC
 a. HGF b. CAB c. JKM d. GHD

Direction: Which word does NOT belong with the others?

86. a. Inch b. Ounce c. Centimeter d. Yard
87. a. Noun b. Preposition c. Punctuation b. Adverb
88. a. Eyes b. Tongue c. Nose d. Chin
89. a. Bajura b. Baitadi c. Bajhang d. Patan
90. a. Balen shah b. Harka sampan Rai c. Gopal Hamal d. Dhanraj Acharya
91. a. Car b. Motorcycle c. Bicycle d. Jeep

Direction: Based on the first two words, choose the correct word.

92. Ship : Sea :: Camel : ?
 a. Land b. Desert c. Mountain d. Forest
93. pack: cards :: bunch: ?
 a. flowers b. car c. game. d. man
94. Drama : Stage :: Tennis : ?
 a. Net b. Courtc. Tournament d. Racket
95. Thermometer: temperature: : compass : ?
 a. Needle b. Pressure c. Direction d. None of the above
96. Architect : Building :: Sculptor : ?
 a. Museumb. Statue c. Chisel d. Stone
97. Geeta walks 20 meter towards north then she walks 12 meter towards the South. Now, she walks 6 meter towards east. How far and in which direction is she from the starting point?
 a. 10 meter North-East b. 10 meter North c. 6 meter East d. 6 meter South-West
98. Pointing to a photograph, a man said, "I have no brother, and that man's father is my father's son. " Whose photograph, was it?
 a. His son b. His own c. His father d. His nephew
99. Arrange: 1. word; 2. paragraph; 3. sentence; 4. letters and 5. phrase in a meaningful sequence.
 a. 4, 1, 5, 3, 2b. 1, 2, 3, 4, 5 c. 4, 1, 5, 2, 3 d. 4, 1, 3, 5, 2
100. Which one will replace the question mark?



- a. 41 b. 64 c. 35 d. 61